





**Elementary School 6th Grade Math 4 [Number and Calculation] Problem Text**

There is a cake shop in Manabu's town. The list of prices of the roll cake, cheesecake, strawberry cake, and chocolate cake at this cake shop is as follows.

			
Roll cake 250 Yen	Cheesecake 300 Yen	Strawberry cake 350 Yen	Chocolate cake 400 Yen

On Sundays, this cake shop has a special discount offer, where all cakes which are priced less than 320 Yen regularly will be sold at 200 Yen.

On Sunday, Manabu went to buy five cakes. I think the cost of the five cakes will be exactly 1500 yen.

First, Manabu chose one roll cake, one strawberry cake, and one chocolate cake.

For the remaining two cakes, which 2 cakes would be better to choose from roll cake, cheese cake, strawberry cake, and chocolate cake?

Write your answer in only one way.

Answer