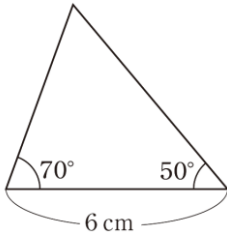


かだめしミニプリント 数学【図形】⑦

年	組	番	名前
---	---	---	----

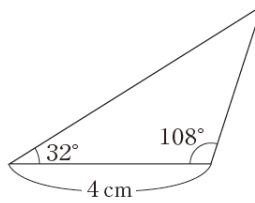
1 (1), (2)の三角形と合同な三角形を, 下の**ア**から**ク**までの中からそれぞれ1つ選びなさい。

(1)



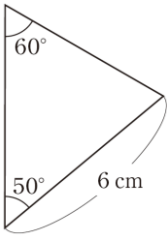
答

(2)

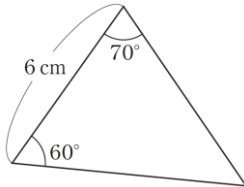


答

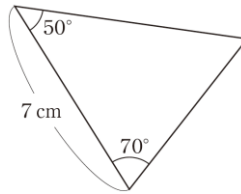
**ア**



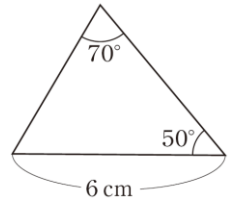
**イ**



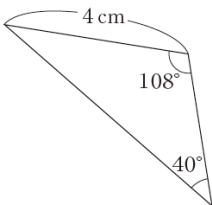
**ウ**



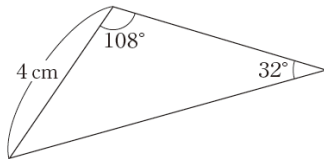
**エ**



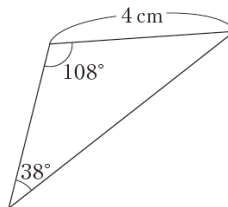
**オ**



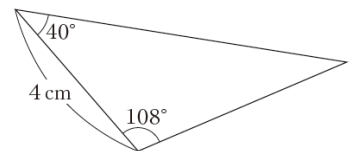
**カ**



**キ**



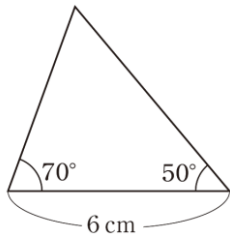
**ク**



年	組	番	名前	解 答
---	---	---	----	-----

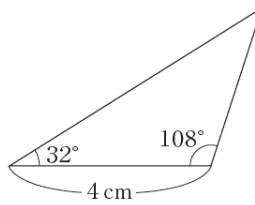
1 (1), (2)の三角形と合同な三角形を, 下の**ア**から**ク**までの中からそれぞれ1つ選びなさい。

(1)



答  
**ア**

(2)

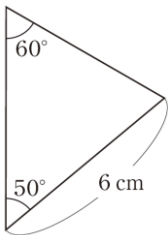


答  
**オ**

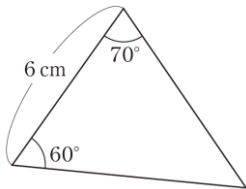
H20 全国A6 (3) 中学校 2年

H24 全国A6(3) 中学校 2年

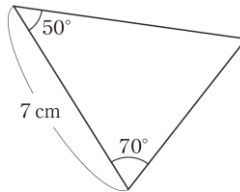
**ア**



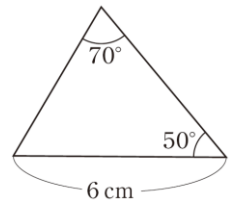
**イ**



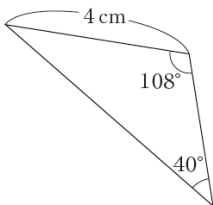
**ウ**



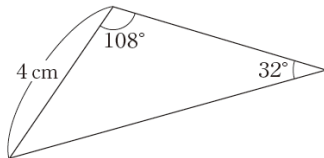
**エ**



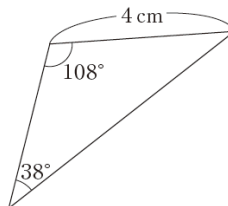
**オ**



**カ**



**キ**



**ク**

